

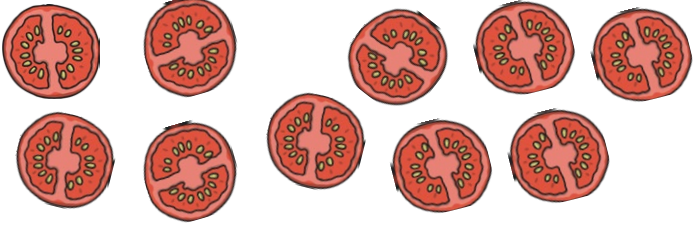
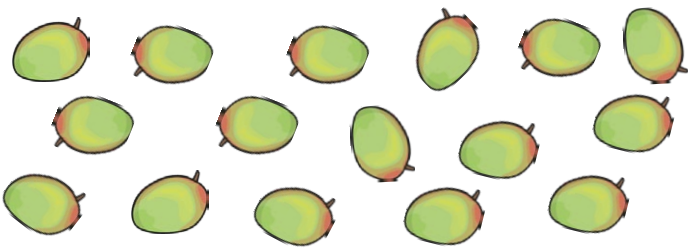
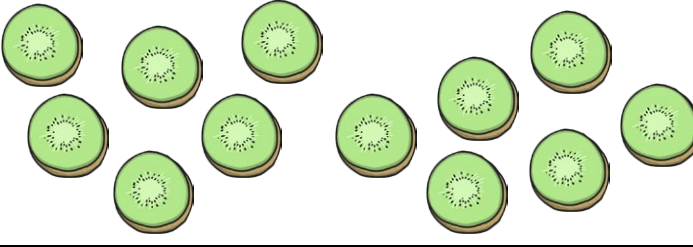




Making Groups of Two

I can count objects in twos and count the groups.



Circle groups of 2.

	How many tomatoes? _____ How many groups _____
	How many mangoes? _____ How many groups _____
	How many kiwis? _____ How many groups _____
	How many pineapples? _____ How many groups _____
	How many strawberries? _____ How many groups _____

0 1 2 3 4 5 6 7 8 9 10 11 12 13 14 15 16 17 18 19 20

On the back of the sheet can you draw a picture of all the things you can think of that come in twos?



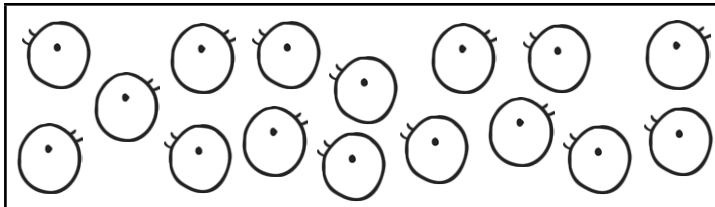
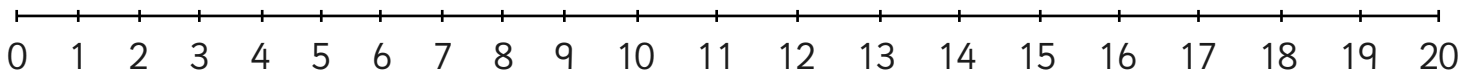
Making Groups of Two

I can count objects in twos and count the groups.



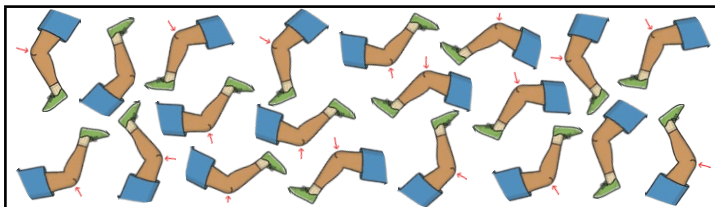
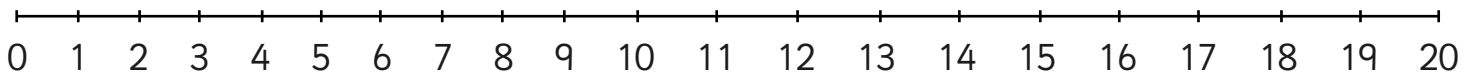
How many wellies? _____

How many children? _____



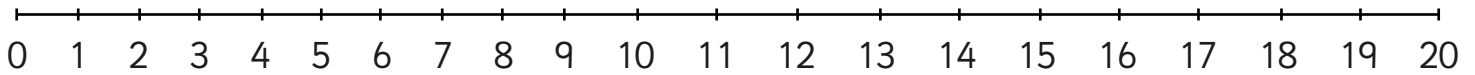
How many eyes? _____

How many people? _____



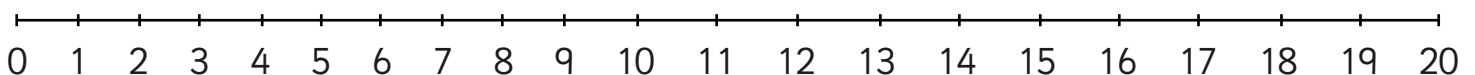
How many knees? _____

How many children? _____



How many shoes? _____

If Alex puts one pair of shoes in each box, how many boxes will she need? _____



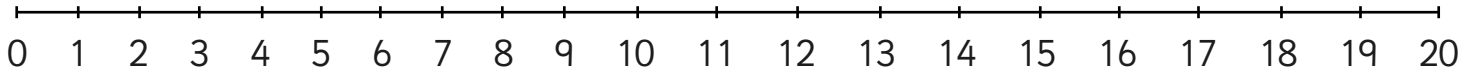


Making Groups of Two



How many 2p coins? _____

How much money? _____



Do you notice anything about your answers? Can you make up a number puzzle of your own?

